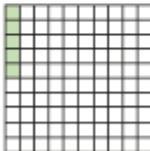


## Decimals as fractions (1)



- 1 The hundred square represents 1 whole.




a) What fraction is represented by the shaded squares?


b) Convert the fraction to a decimal.

- 2 Colour the grid to represent the fraction and the decimal.

a)  $\frac{7}{100}$



b) 0.17



- 3 What fractions and decimals do the counters represent?



fraction =  decimal =




fraction =  decimal =



fraction =  decimal =

- 4 Amir has coloured part of a hundred square.



a) What fraction is represented by the coloured squares?

/100

b) Write this fraction in a different way.

c) Write the fraction as a decimal.