







































# Shapes Times Shape

The coloured shapes stand for eleven of the numbers from 0 to 12. Each shape is a different number.

Can you work out what they are from the multiplications below?

 x  x  = 	 x  = 
 x  = 	 x  = 
 x  = 	 x  = 
 x  = 	 x  = 
 x  = 	 x  = 
 x  = 	 x  = 