

Year 3 Maths Activity Mat

①

Section 1

$$324 + 216 = \boxed{}$$


$$215 + \boxed{} = 515$$

Section 2

What is $\frac{1}{3}$ of 27?

What is $\frac{2}{10}$ of 50?

Section 3



What time is this?

What time will it be in 2 hours and ten minutes?

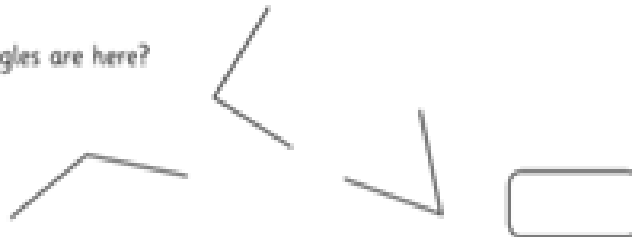
Section 4

At Bessie's Farm 375 eggs were collected. 141 of them were sold. How many eggs were left?

	H	T	O
-			

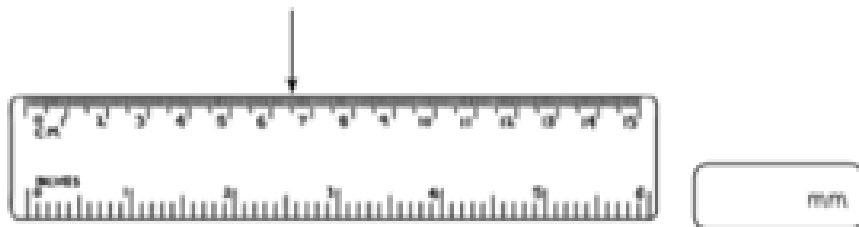
Section 5

How many right angles are here?



Section 6

How many cm is the arrow pointing to? Now write the measurement in mm.



Section 7

I buy a hat priced at £3.25. I pay using a £5 note. How much change will I have?

Section 8

How many faces does a cuboid have? Draw a cuboid here.