


ADD WHOLE
NUMBERS WITH
MORE THAN 4
DIGITS



GET READY



$$1) 400 + 540 =$$

$$2) 400 + 546 =$$

$$3) 160 + 327 =$$

$$4) 143 + 27 =$$

$$1) 400 + 540 = 940$$

$$2) 400 + 546 = 946$$

$$3) 160 + 327 = 487$$

$$4) 143 + 27 = 170$$


LET'S LEARN



Dexter scores 12,304 points in a game.

Rosie scores 1,263 points.

How much do they score altogether?



Dexter scores 12,304


Rosie scores 1,263

TTh	Th	H	T	O
10,000	1,000 1,000		100 100 100	1 1 1 1
	1,000	100 100	10 10 10 10 10 10	1 1 1
1	3	5	6	7

TTh	Th	H	T	O
1	2	3	0	4
	1	2	6	3
1	3	5	6	7




Dexter scores 12,304 points in a game. Have a think
Rosie scores 1,263 points.



How much do they score altogether?

13,567



Mo scores 12,304 points in a game.
Eva scores 1,268 points.

How much do they score altogether?

Mo scores 12,304

Eva scores 1,268

TTh	Th	H	T	O
10,000	1,000 1,000	100 100 100		1 1 1 1
	1,000	100 100	10 10 10 10 10 10	1 1 1 1 1 1 1 1
1	3	5	7	122

10

TTh	Th	H	T	O
1	2	3	0	4
	1	2	6	8
1	3	5	7	<u>122</u>

1

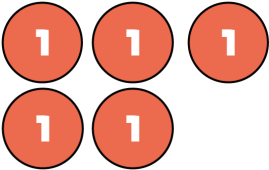


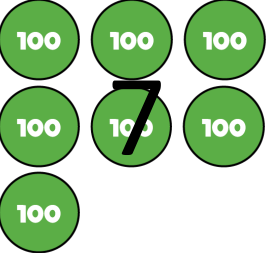

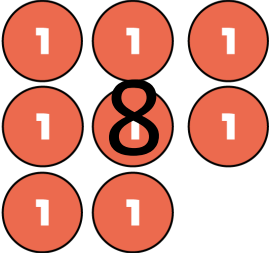


YOUR TURN

Have a go at questions
1 – 5 on the worksheet


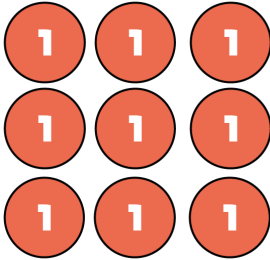

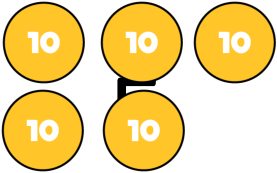



	H	T	O
			5
+	1	4	
	7	4	8

Hundreds	Tens	Ones
		
		
		

	H	T	O
	4		9
+		2	
		5	2

1

Hundreds	Tens	Ones
		
		
		 2

10


Have a think



6 4 7

$$+ 463 = 1,000$$

The missing number is 647



$$600 + 400 = 1,000$$

$$\boxed{537} + 463 = 1,000$$

$$463 + 7 = 470$$

$$470 + 30 = 500$$

$$500 + 500 = 1,000$$

YOUR TURN

Have a go at the rest of
the worksheet

